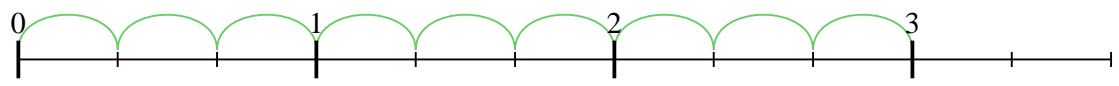


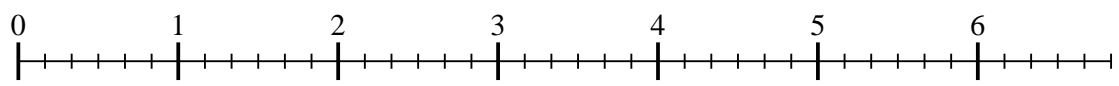


Use the numberline to solve each problem. The first is marked for you.

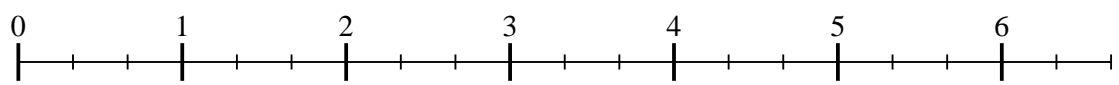
1) $3 \div \frac{1}{3}$



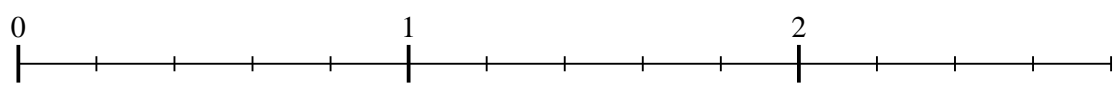
2) $6 \div \frac{1}{6}$



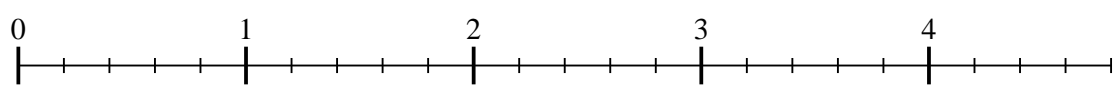
3) $6 \div \frac{1}{3}$



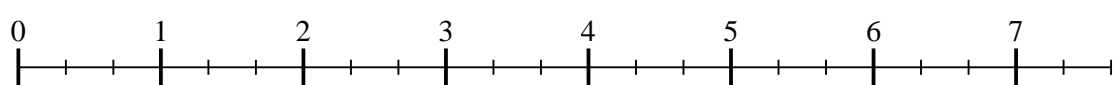
4) $2 \div \frac{1}{5}$



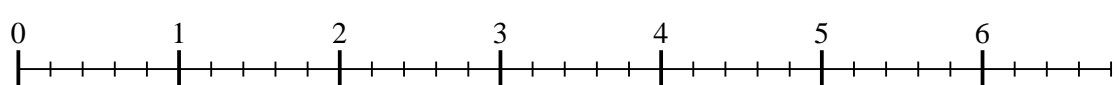
5) $4 \div \frac{1}{5}$



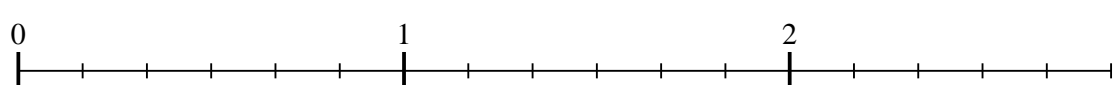
6) $7 \div \frac{1}{3}$



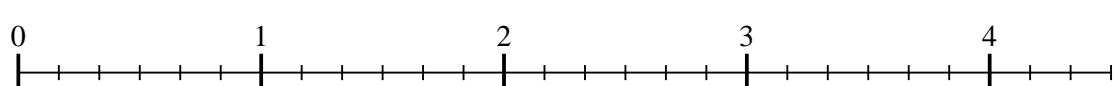
7) $6 \div \frac{1}{5}$



8) $2 \div \frac{1}{6}$



9) $4 \div \frac{1}{6}$



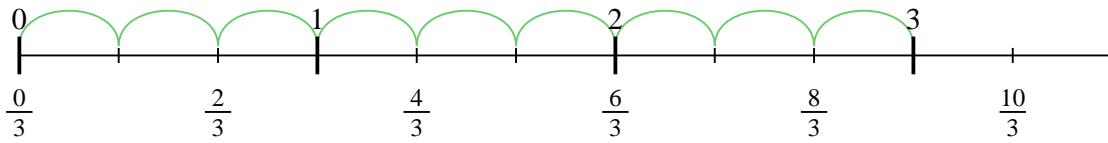
Answers

1. _____
2. _____
3. _____
4. _____
5. _____
6. _____
7. _____
8. _____
9. _____

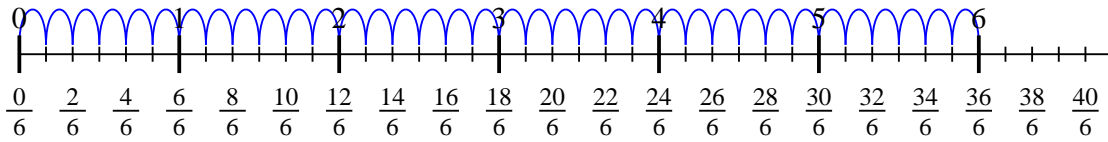


Use the numberline to solve each problem. The first is marked for you.

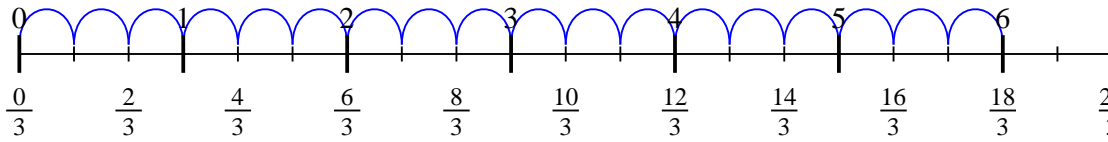
1) $3 \div \frac{1}{3}$



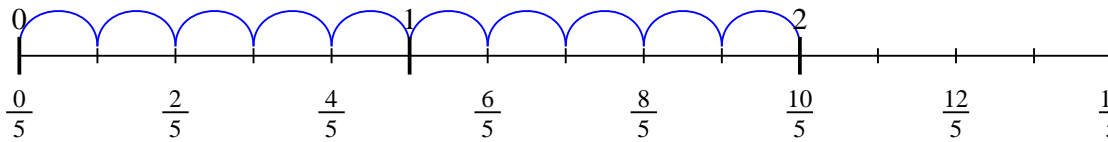
2) $6 \div \frac{1}{6}$



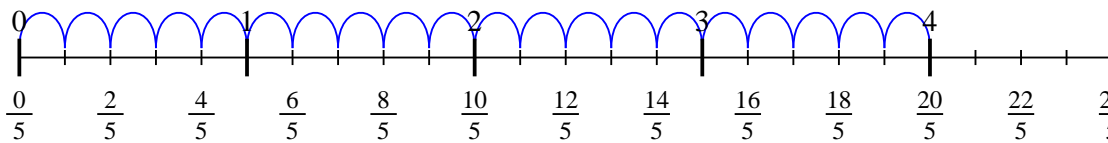
3) $6 \div \frac{1}{3}$



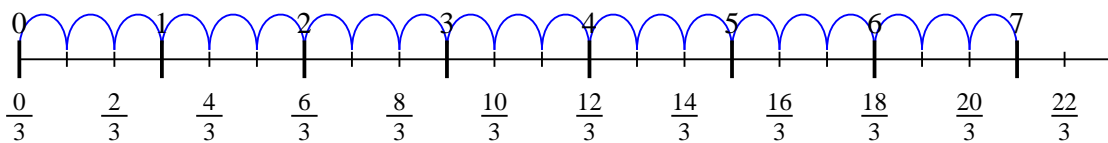
4) $2 \div \frac{1}{5}$



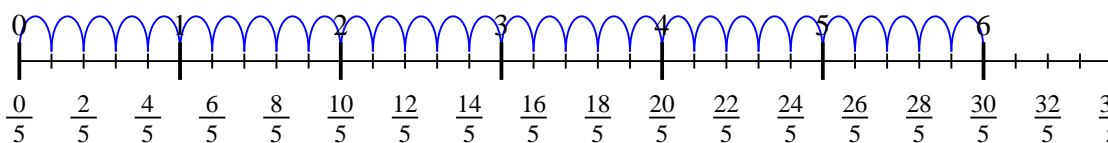
5) $4 \div \frac{1}{5}$



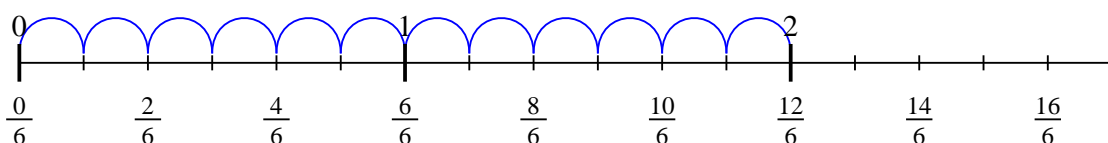
6) $7 \div \frac{1}{3}$



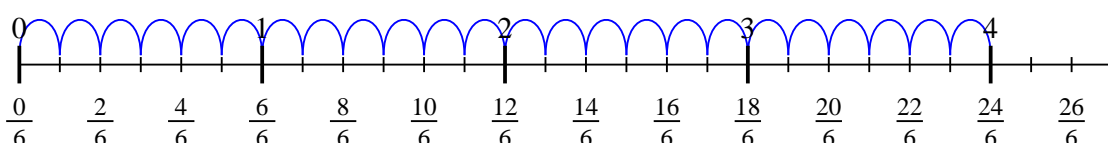
7) $6 \div \frac{1}{5}$



8) $2 \div \frac{1}{6}$



9) $4 \div \frac{1}{6}$



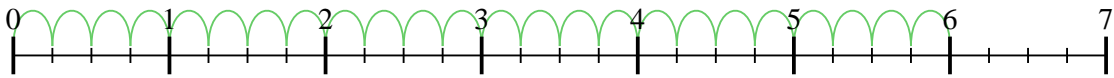
Answers

1. 9
2. 36
3. 18
4. 10
5. 20
6. 21
7. 30
8. 12
9. 24

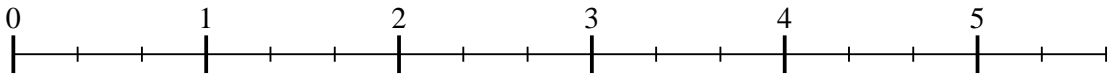


Use the numberline to solve each problem. The first is marked for you.

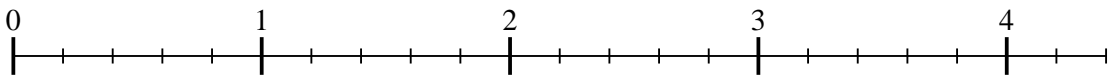
1) $6 \div \frac{1}{4}$



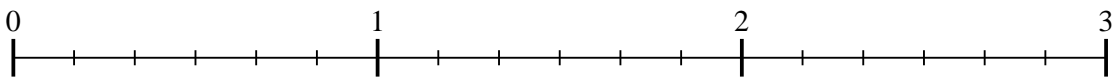
2) $5 \div \frac{1}{3}$



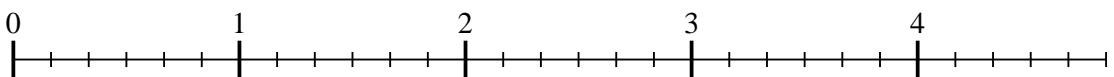
3) $4 \div \frac{1}{5}$



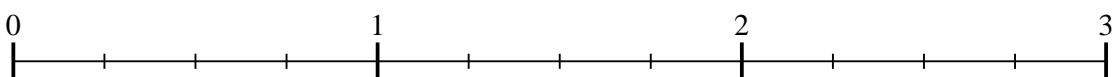
4) $2 \div \frac{1}{6}$




5) $4 \div \frac{1}{6}$




6) $2 \div \frac{1}{4}$



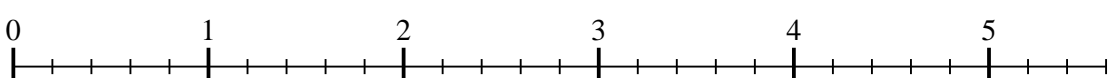
7) $3 \div \frac{1}{3}$



8) $2 \div \frac{1}{3}$



9) $5 \div \frac{1}{5}$



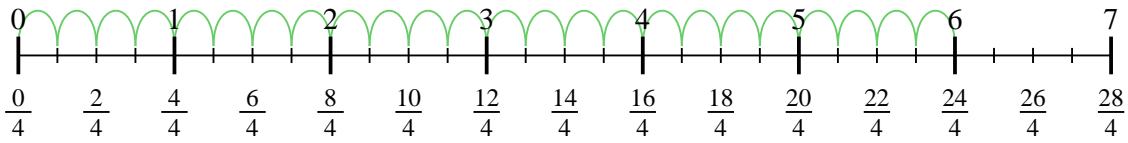
Answers

1. _____
2. _____
3. _____
4. _____
5. _____
6. _____
7. _____
8. _____
9. _____

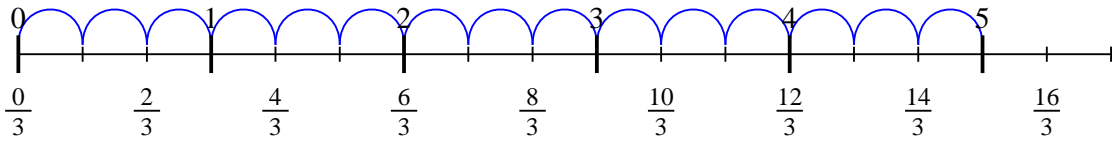


Use the numberline to solve each problem. The first is marked for you.

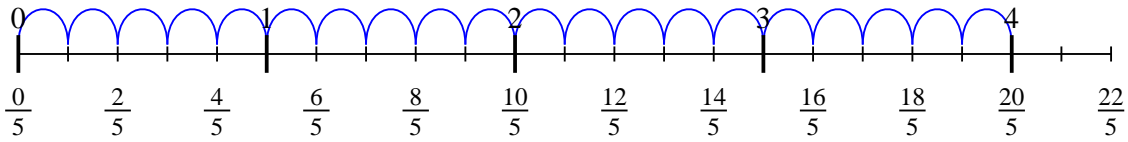
1) $6 \div \frac{1}{4}$



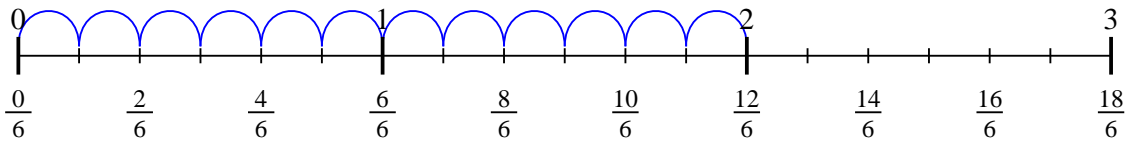
2) $5 \div \frac{1}{3}$



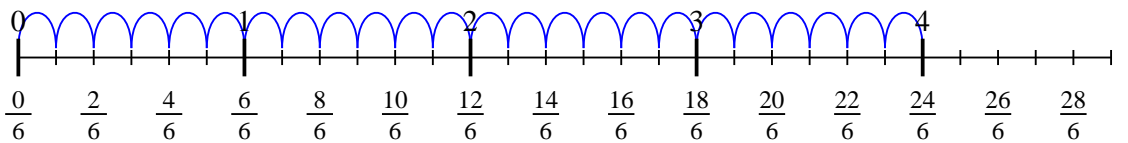
3) $4 \div \frac{1}{5}$



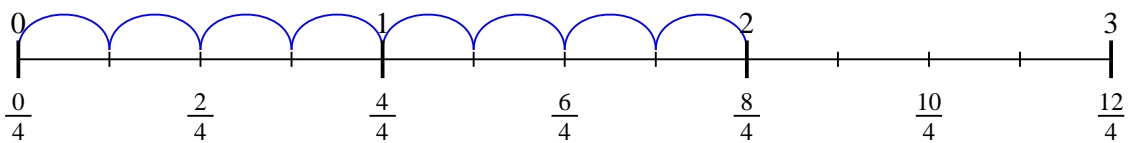
4) $2 \div \frac{1}{6}$



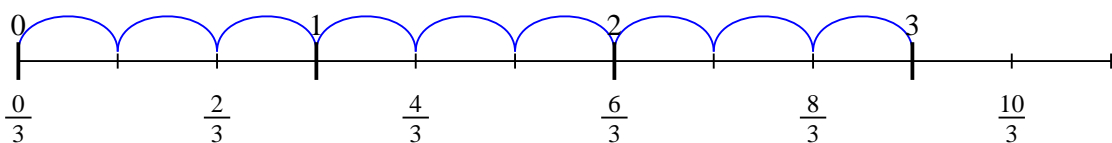
5) $4 \div \frac{1}{6}$



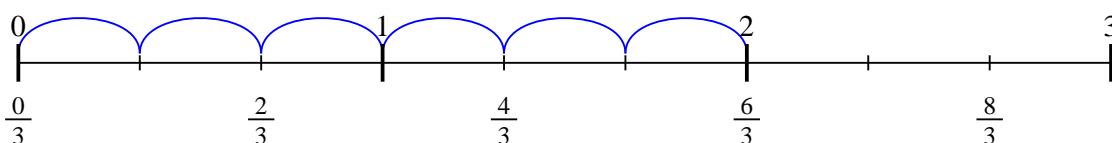
6) $2 \div \frac{1}{4}$



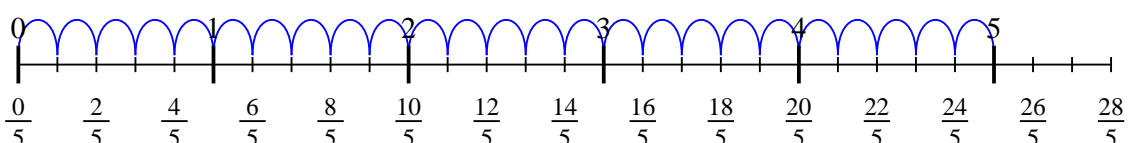
7) $3 \div \frac{1}{3}$



8) $2 \div \frac{1}{3}$



9) $5 \div \frac{1}{5}$



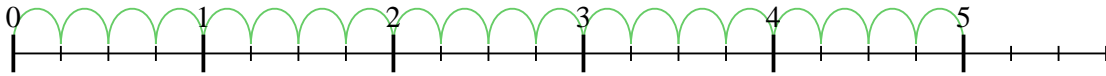
Answers

1. 24
2. 15
3. 20
4. 12
5. 24
6. 8
7. 9
8. 6
9. 25

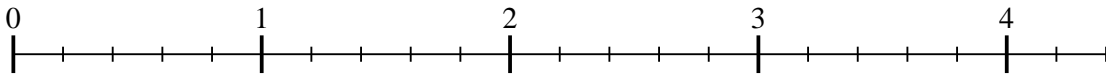


Use the numberline to solve each problem. The first is marked for you.

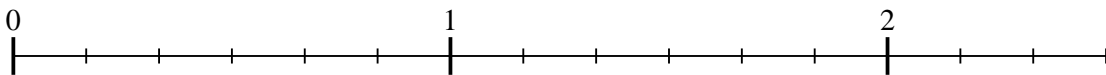
1) $5 \div \frac{1}{4}$



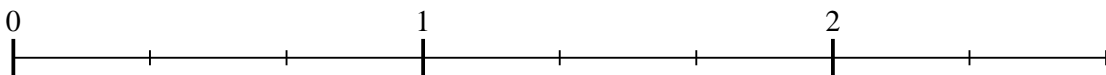
2) $4 \div \frac{1}{5}$



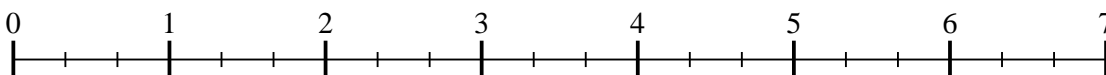
3) $2 \div \frac{1}{6}$



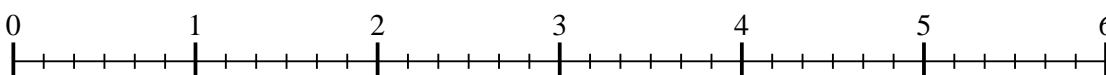
4) $2 \div \frac{1}{3}$



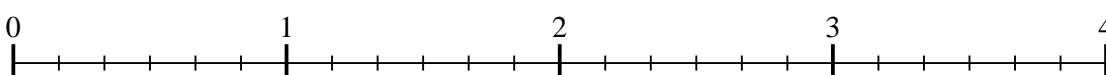
5) $6 \div \frac{1}{3}$



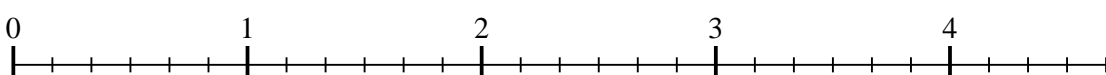
6) $5 \div \frac{1}{6}$




7) $3 \div \frac{1}{6}$



8) $4 \div \frac{1}{6}$



9) $3 \div \frac{1}{3}$



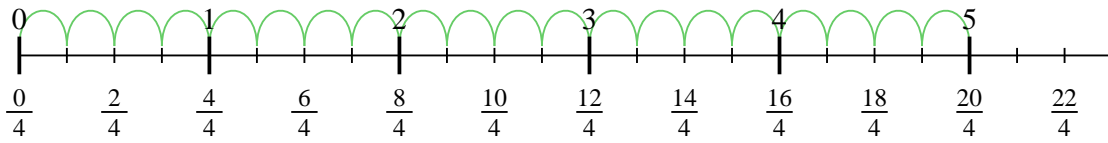
Answers

1. _____
2. _____
3. _____
4. _____
5. _____
6. _____
7. _____
8. _____
9. _____

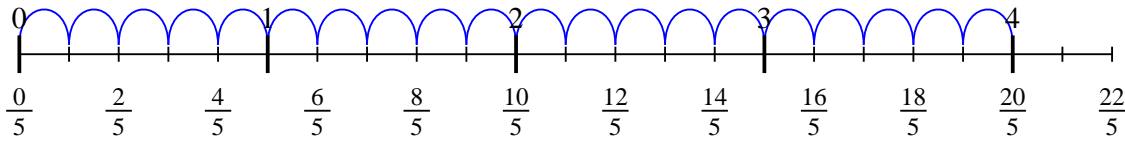


Use the numberline to solve each problem. The first is marked for you.

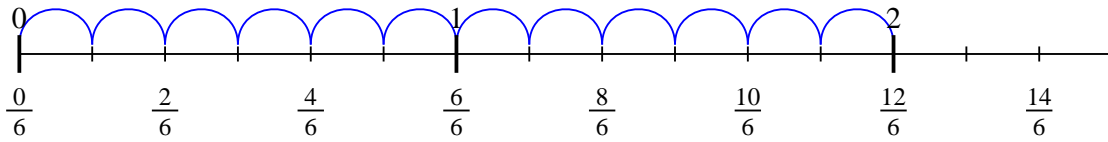
1) $5 \div \frac{1}{4}$



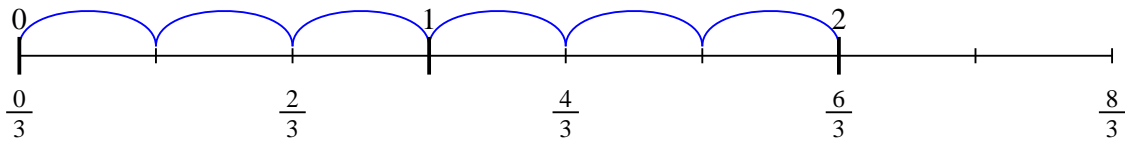
2) $4 \div \frac{1}{5}$



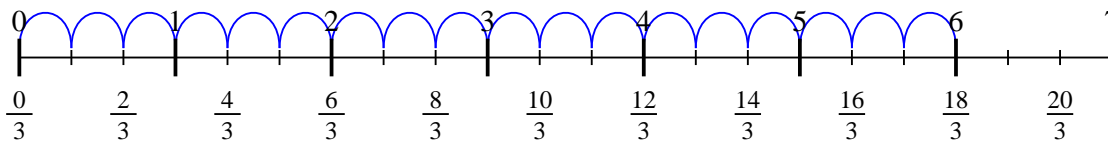
3) $2 \div \frac{1}{6}$



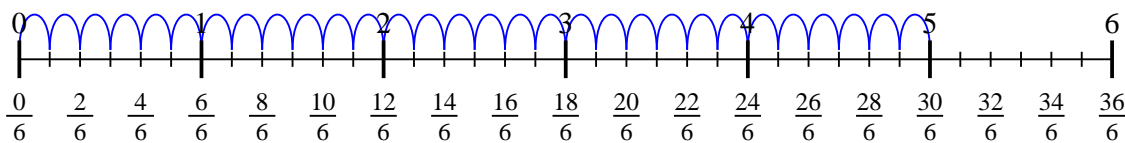
4) $2 \div \frac{1}{3}$



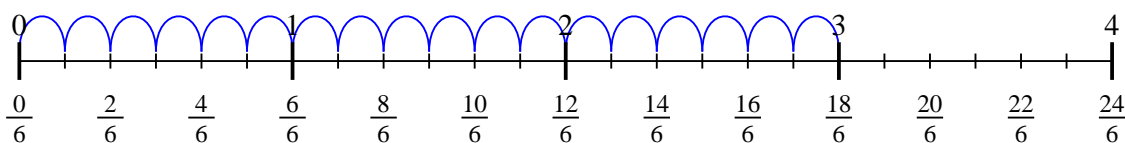
5) $6 \div \frac{1}{3}$



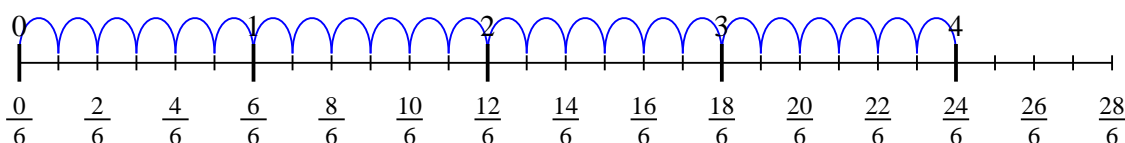
6) $5 \div \frac{1}{6}$



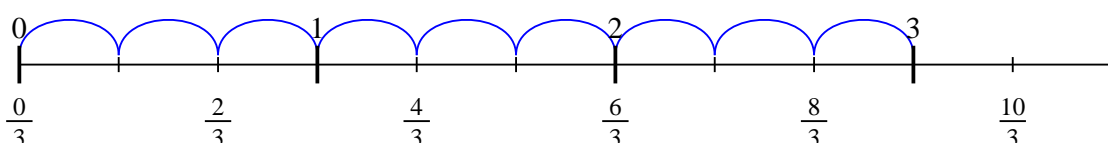
7) $3 \div \frac{1}{6}$



8) $4 \div \frac{1}{6}$



9) $3 \div \frac{1}{3}$



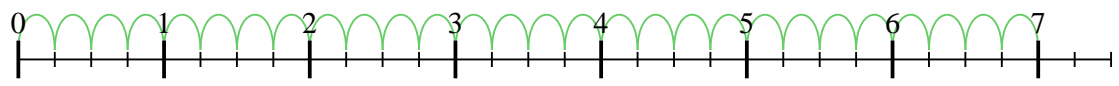
Answers

1. 20
2. 20
3. 12
4. 6
5. 18
6. 30
7. 18
8. 24
9. 9

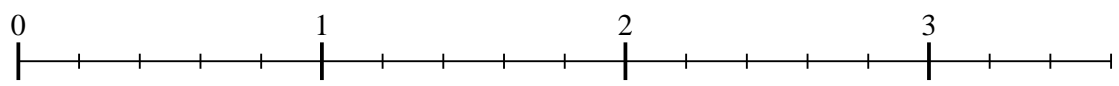


Use the numberline to solve each problem. The first is marked for you.

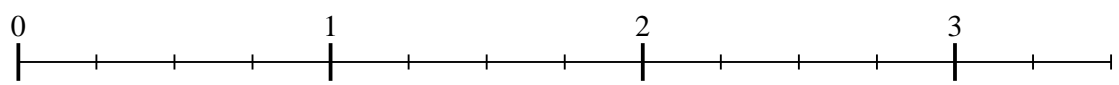
1) $7 \div \frac{1}{4}$



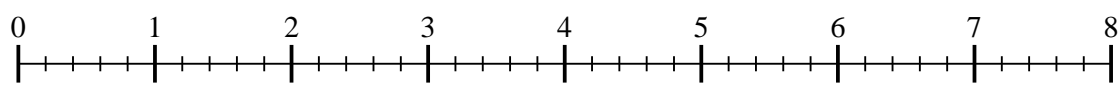
2) $3 \div \frac{1}{5}$



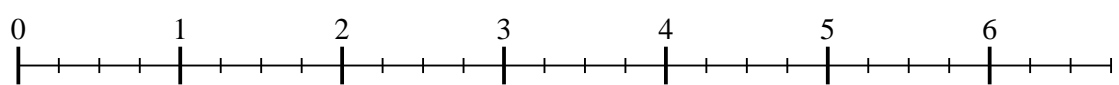
3) $3 \div \frac{1}{4}$



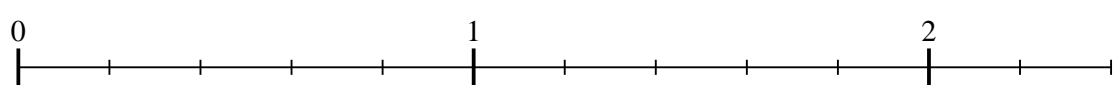
4) $7 \div \frac{1}{5}$



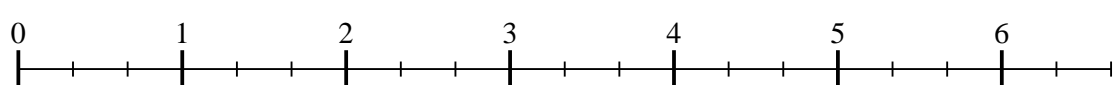
5) $6 \div \frac{1}{4}$




6) $2 \div \frac{1}{5}$



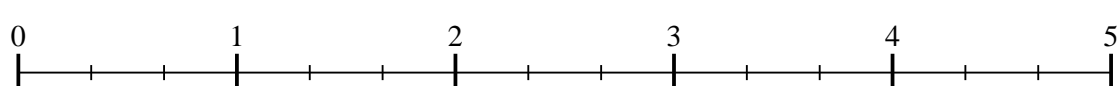
7) $6 \div \frac{1}{3}$



8) $3 \div \frac{1}{3}$



9) $4 \div \frac{1}{3}$



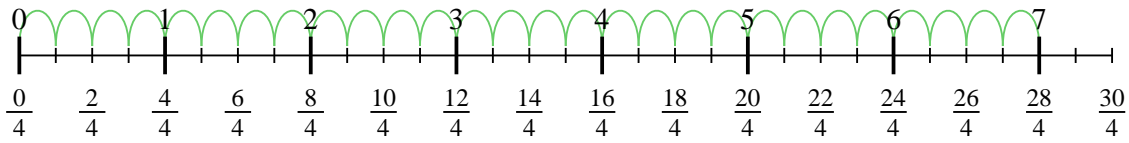
Answers

- 1. _____
- 2. _____
- 3. _____
- 4. _____
- 5. _____
- 6. _____
- 7. _____
- 8. _____
- 9. _____

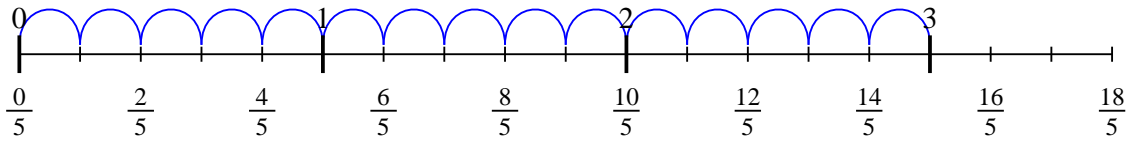


Use the numberline to solve each problem. The first is marked for you.

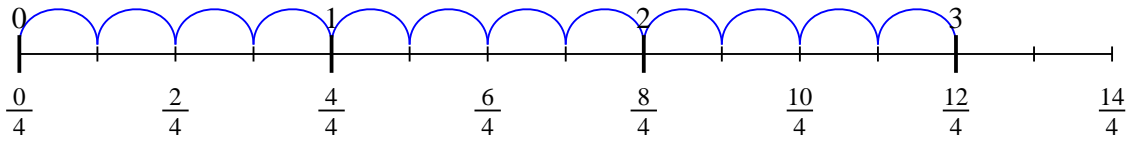
1) $7 \div \frac{1}{4}$



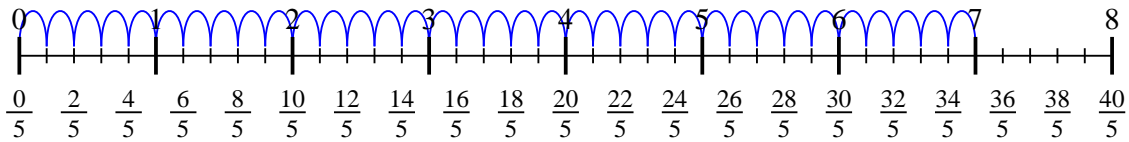
2) $3 \div \frac{1}{5}$



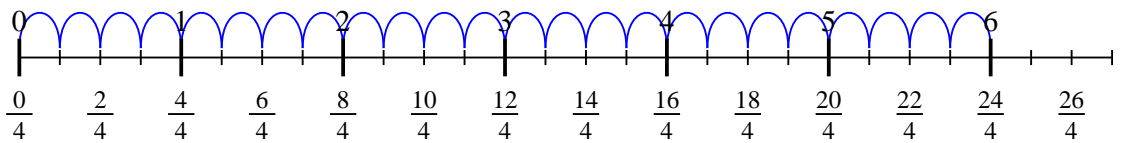
3) $3 \div \frac{1}{4}$



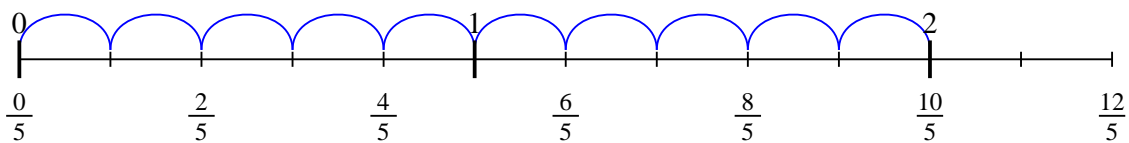
4) $7 \div \frac{1}{5}$



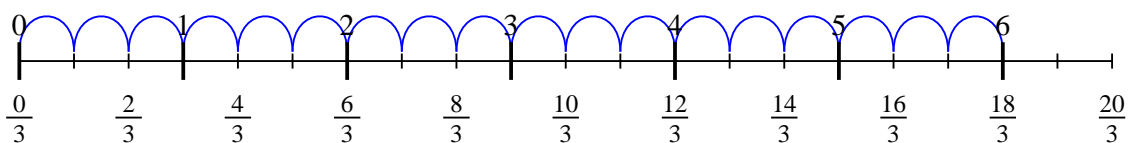
5) $6 \div \frac{1}{4}$



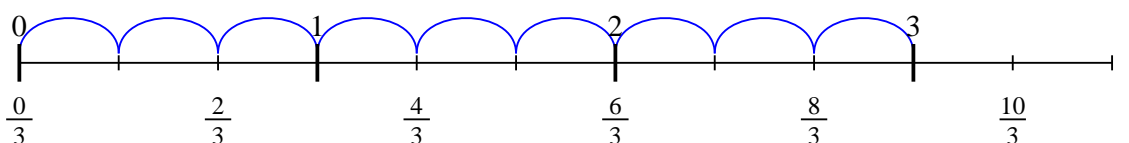
6) $2 \div \frac{1}{5}$



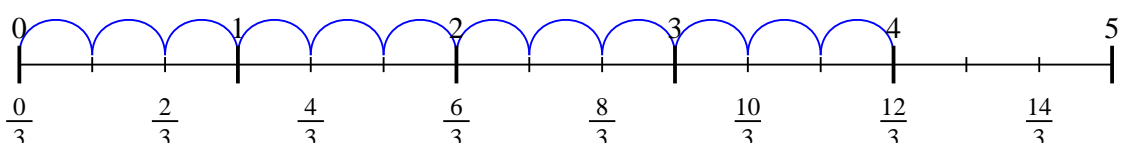
7) $6 \div \frac{1}{3}$



8) $3 \div \frac{1}{3}$



9) $4 \div \frac{1}{3}$



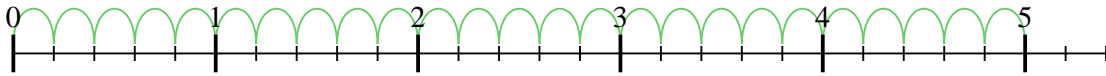
Answers

1. 28
2. 15
3. 12
4. 35
5. 24
6. 10
7. 18
8. 9
9. 12

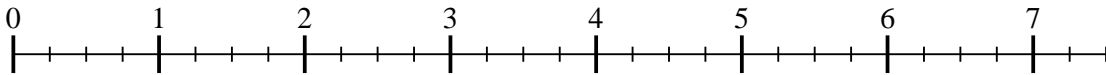


Use the numberline to solve each problem. The first is marked for you.

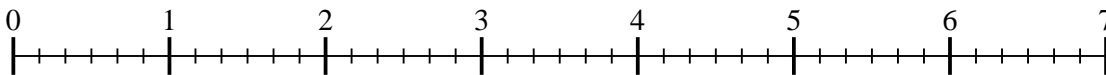
1) $5 \div \frac{1}{5}$



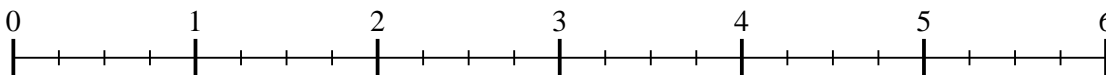
2) $7 \div \frac{1}{4}$



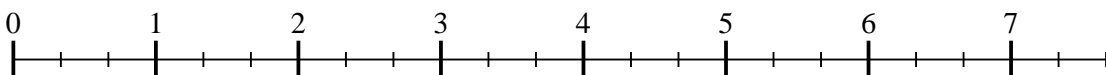
3) $6 \div \frac{1}{6}$



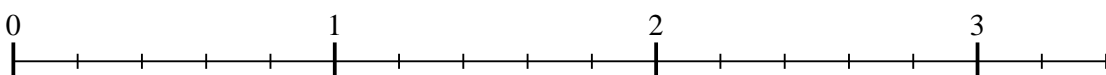
4) $5 \div \frac{1}{4}$



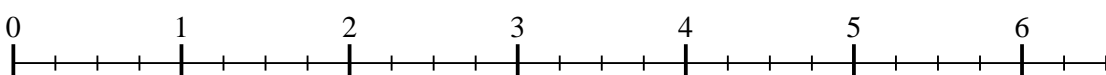
5) $7 \div \frac{1}{3}$



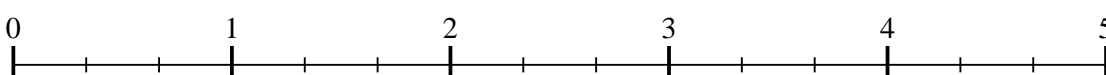
6) $3 \div \frac{1}{5}$



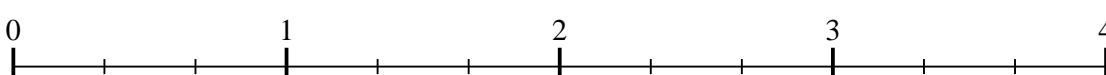
7) $6 \div \frac{1}{4}$



8) $4 \div \frac{1}{3}$



9) $3 \div \frac{1}{3}$



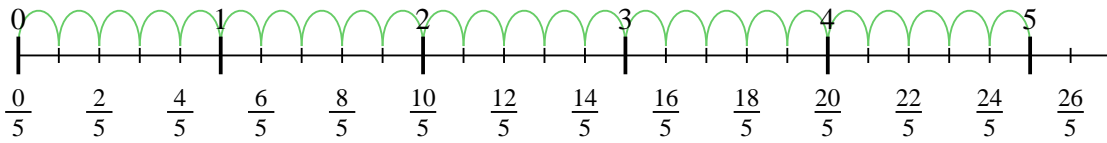
Answers

1. _____
2. _____
3. _____
4. _____
5. _____
6. _____
7. _____
8. _____
9. _____

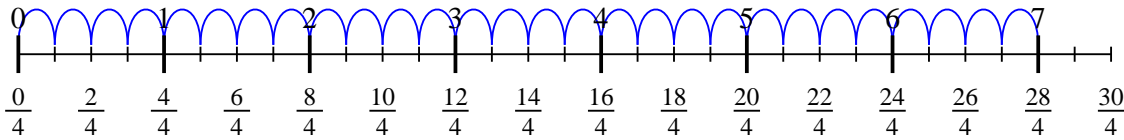


Use the numberline to solve each problem. The first is marked for you.

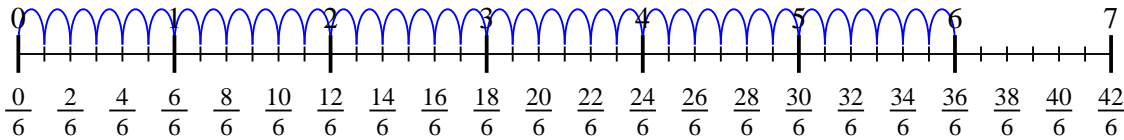
1) $5 \div \frac{1}{5}$



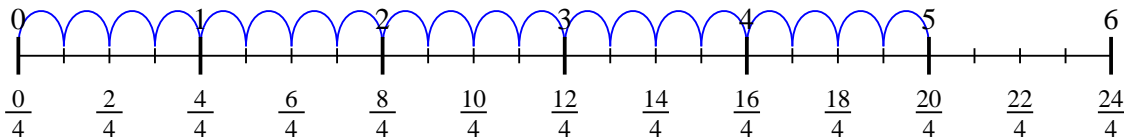
2) $7 \div \frac{1}{4}$



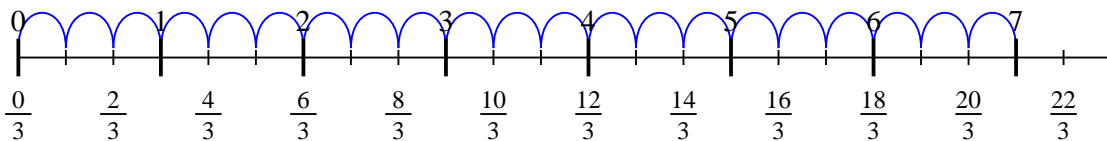
3) $6 \div \frac{1}{6}$



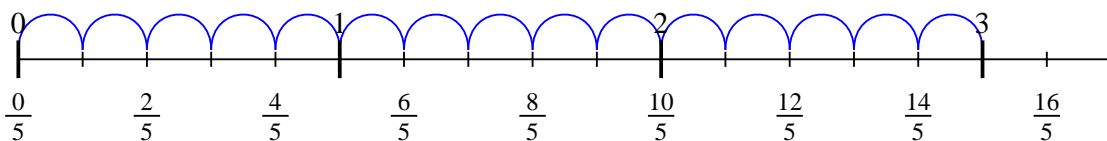
4) $5 \div \frac{1}{4}$



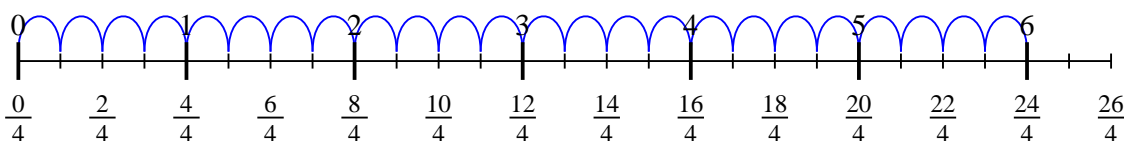
5) $7 \div \frac{1}{3}$



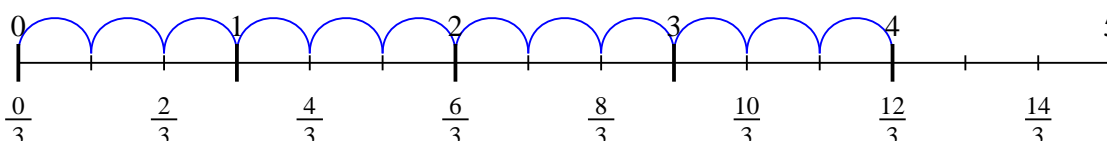
6) $3 \div \frac{1}{5}$



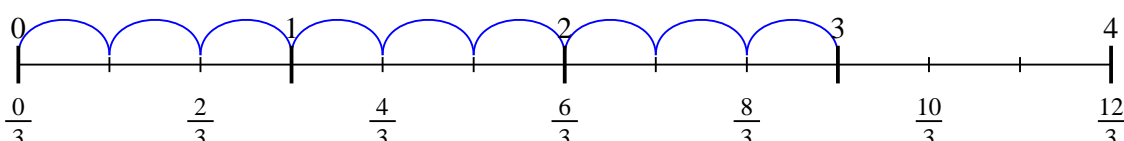
7) $6 \div \frac{1}{4}$



8) $4 \div \frac{1}{3}$



9) $3 \div \frac{1}{3}$



Answers

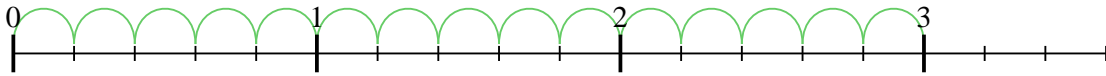
1. 25
2. 28
3. 36
4. 20
5. 21
6. 15
7. 24
8. 12
9. 9



Use the numberline to solve each problem. The first is marked for you.

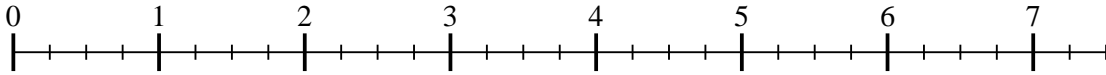
Answers

1) $3 \div \frac{1}{5}$



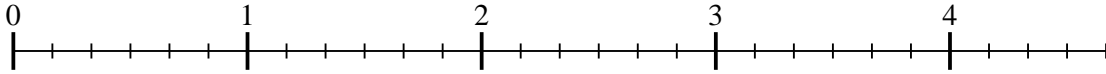
1. _____

2) $7 \div \frac{1}{4}$



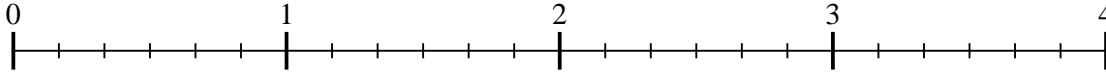
2. _____

3) $4 \div \frac{1}{6}$



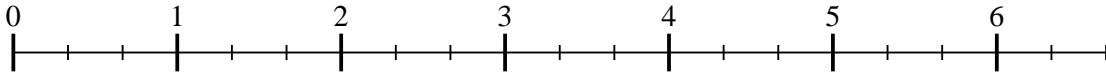
3. _____

4) $3 \div \frac{1}{6}$



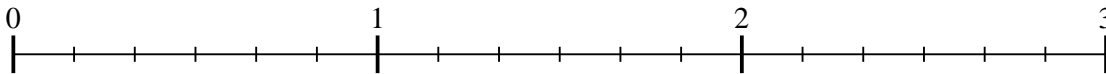
4. _____

5) $6 \div \frac{1}{3}$



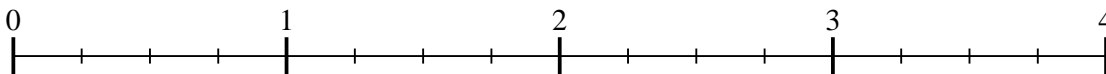
5. _____

6) $2 \div \frac{1}{6}$



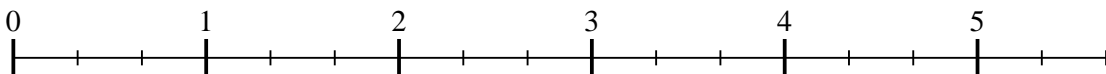
6. _____

7) $3 \div \frac{1}{4}$



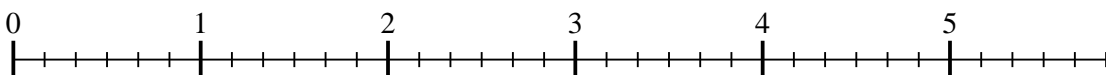
7. _____

8) $5 \div \frac{1}{3}$



8. _____

9) $5 \div \frac{1}{6}$

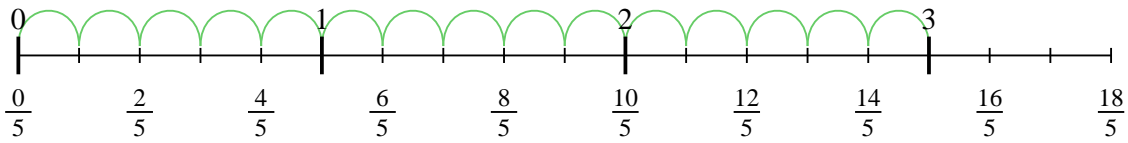


9. _____

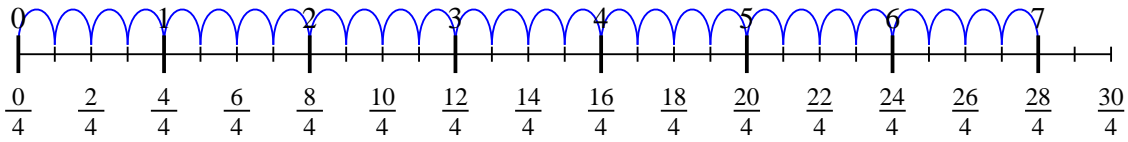


Use the numberline to solve each problem. The first is marked for you.

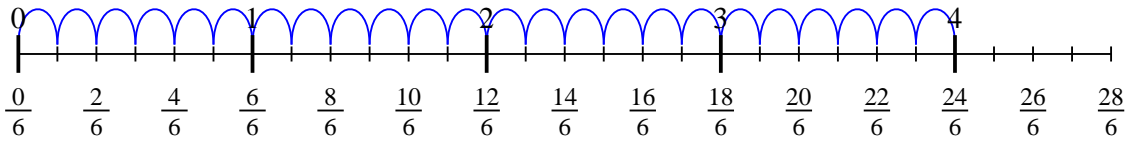
1) $3 \div \frac{1}{5}$



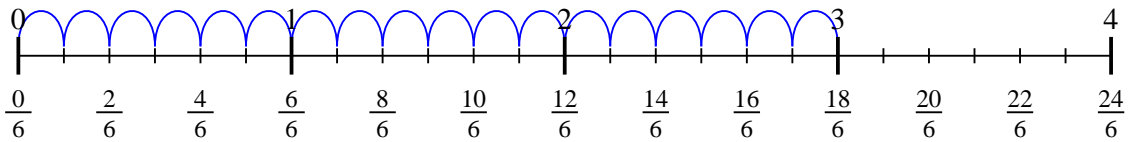
2) $7 \div \frac{1}{4}$



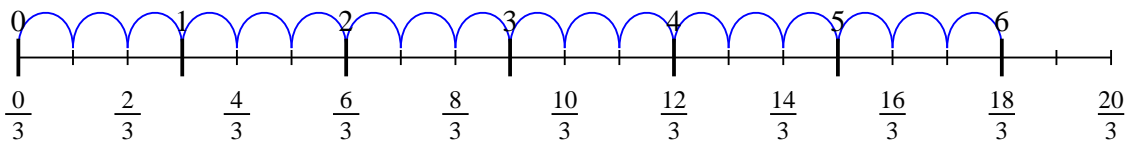
3) $4 \div \frac{1}{6}$



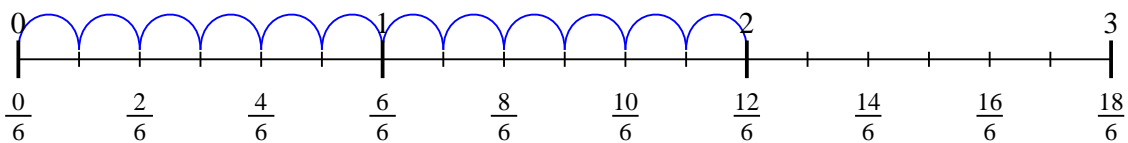
4) $3 \div \frac{1}{6}$



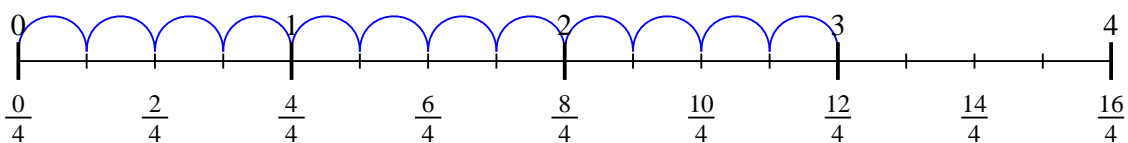
5) $6 \div \frac{1}{3}$



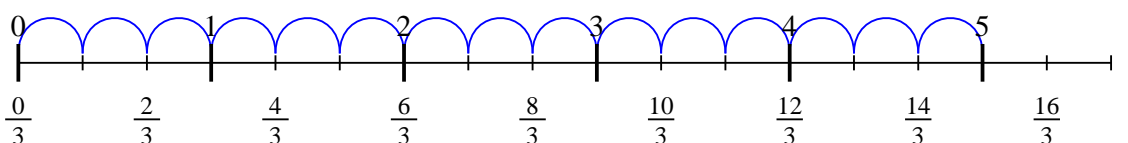
6) $2 \div \frac{1}{6}$



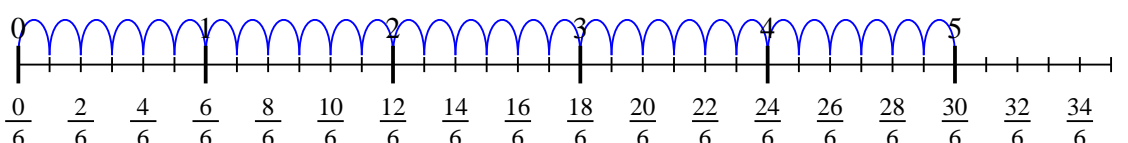
7) $3 \div \frac{1}{4}$



8) $5 \div \frac{1}{3}$



9) $5 \div \frac{1}{6}$



Answers

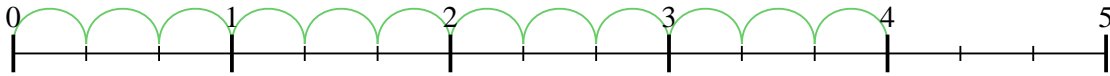
1. 15
2. 28
3. 24
4. 18
5. 18
6. 12
7. 12
8. 15
9. 30



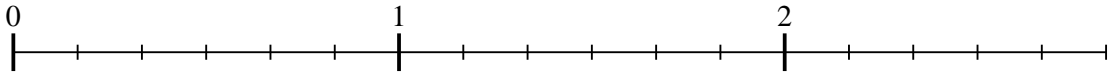
Use the numberline to solve each problem. The first is marked for you.

Answers

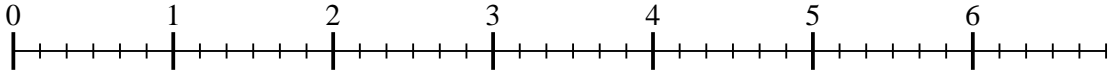
1) $4 \div \frac{1}{3}$



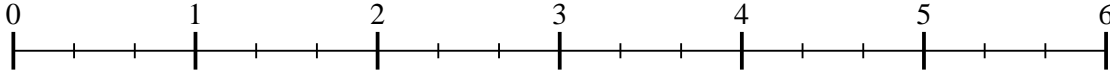
2) $2 \div \frac{1}{6}$



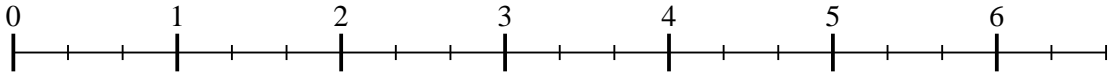
3) $6 \div \frac{1}{6}$



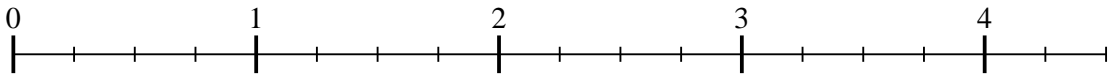
4) $5 \div \frac{1}{3}$



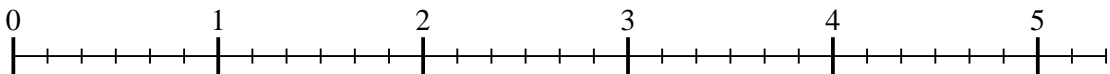
5) $6 \div \frac{1}{3}$



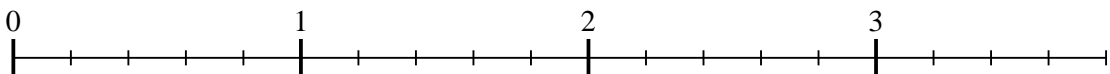
6) $4 \div \frac{1}{4}$



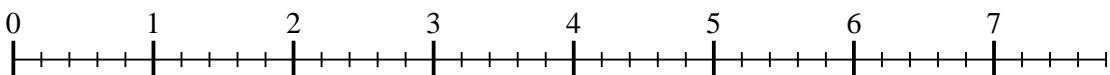
7) $5 \div \frac{1}{6}$



8) $3 \div \frac{1}{5}$



9) $7 \div \frac{1}{5}$

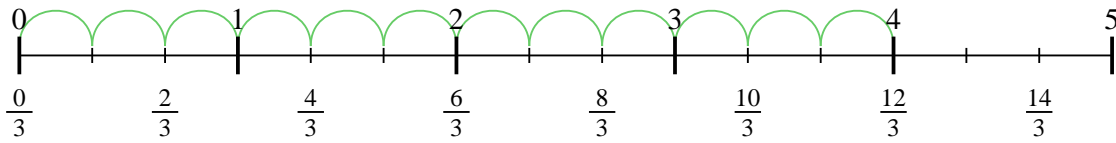


1. _____
2. _____
3. _____
4. _____
5. _____
6. _____
7. _____
8. _____
9. _____

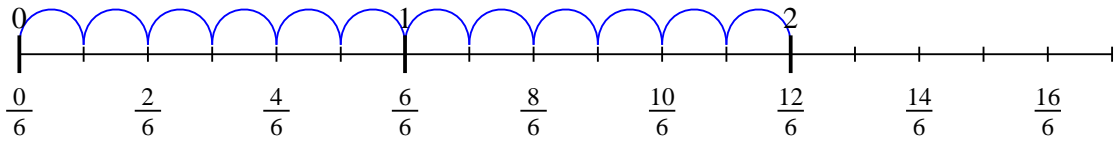


Use the numberline to solve each problem. The first is marked for you.

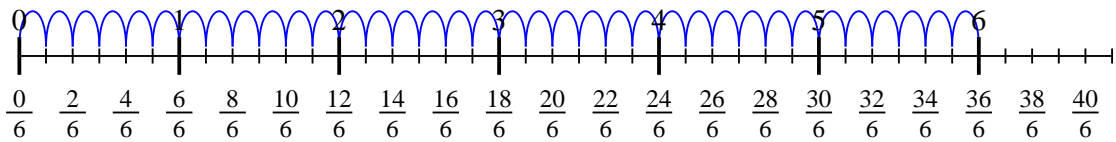
1) $4 \div \frac{1}{3}$



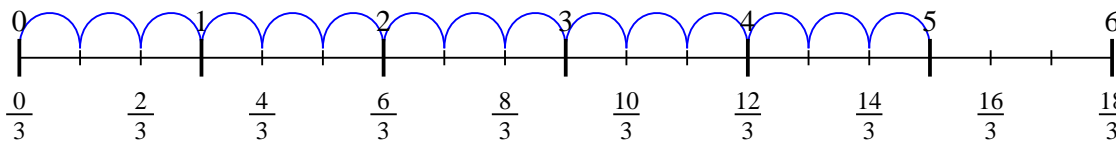
2) $2 \div \frac{1}{6}$



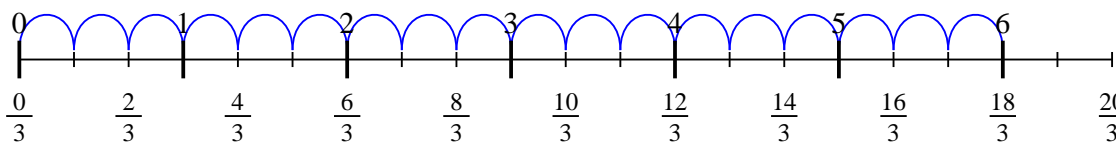
3) $6 \div \frac{1}{6}$



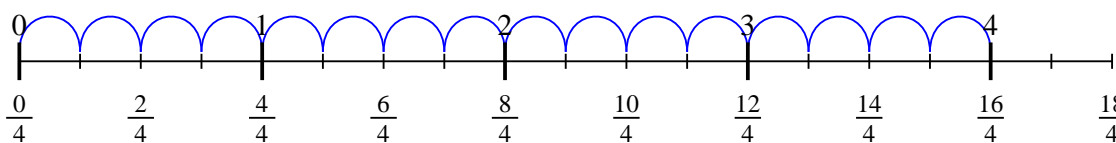
4) $5 \div \frac{1}{3}$



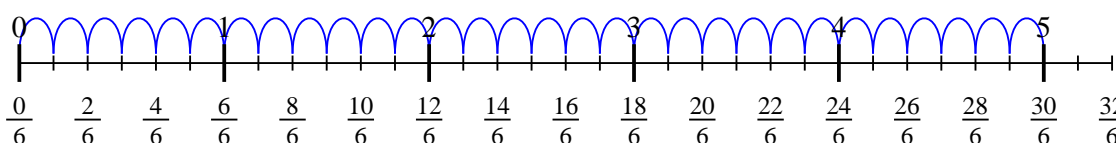
5) $6 \div \frac{1}{3}$



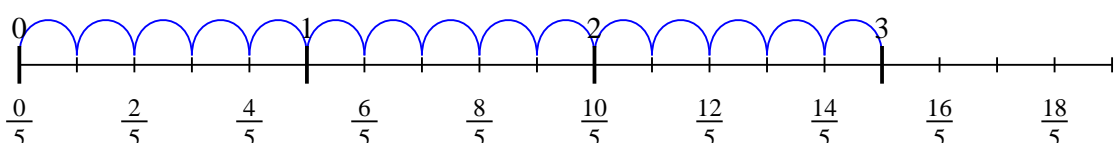
6) $4 \div \frac{1}{4}$



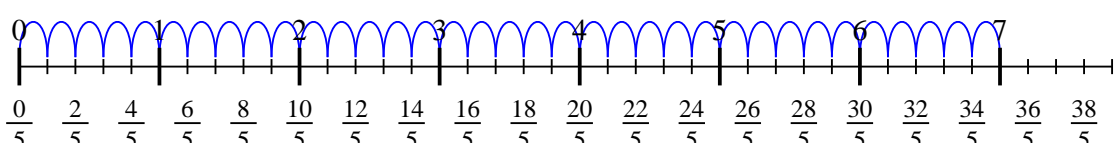
7) $5 \div \frac{1}{6}$



8) $3 \div \frac{1}{5}$



9) $7 \div \frac{1}{5}$



Answers

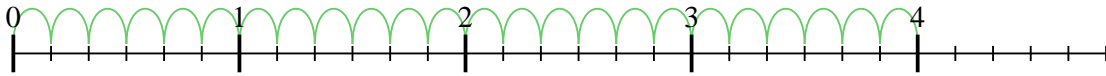
1. 12
2. 12
3. 36
4. 15
5. 18
6. 16
7. 30
8. 15
9. 35



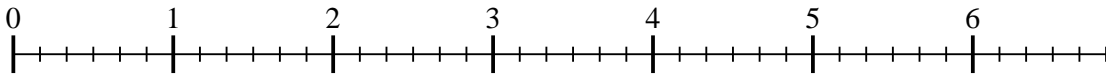
Use the numberline to solve each problem. The first is marked for you.

Answers

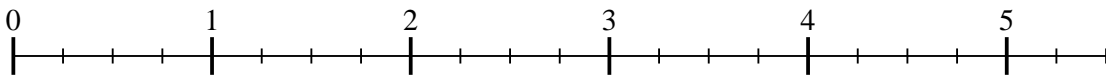
1) $4 \div \frac{1}{6}$



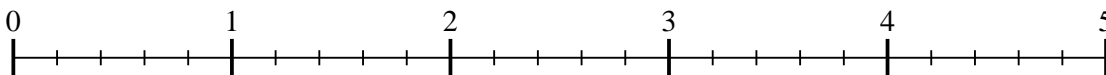
2) $6 \div \frac{1}{6}$



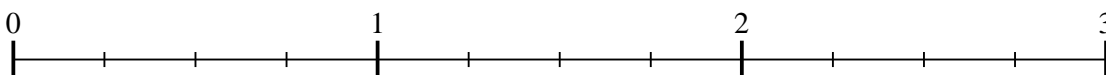
3) $5 \div \frac{1}{4}$



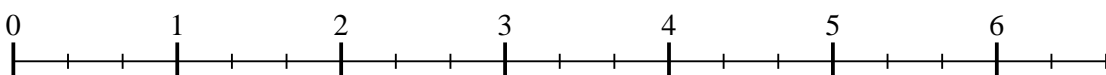
4) $4 \div \frac{1}{5}$



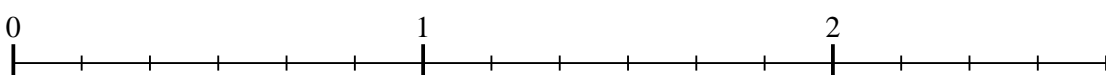
5) $2 \div \frac{1}{4}$



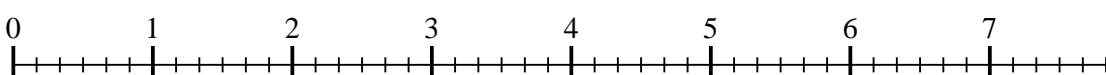
6) $6 \div \frac{1}{3}$




7) $2 \div \frac{1}{6}$



8) $7 \div \frac{1}{6}$



9) $2 \div \frac{1}{3}$

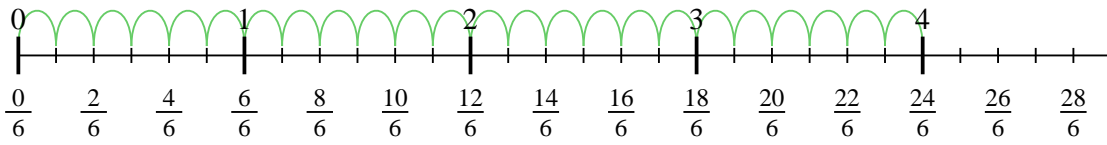


- 1. _____
- 2. _____
- 3. _____
- 4. _____
- 5. _____
- 6. _____
- 7. _____
- 8. _____
- 9. _____

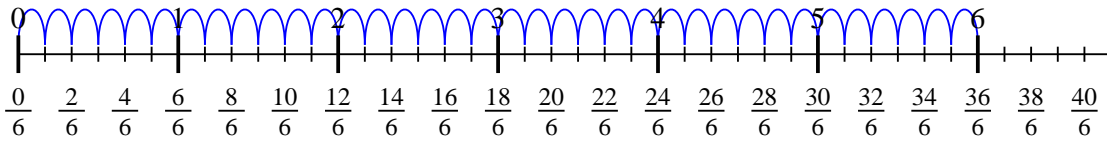


Use the numberline to solve each problem. The first is marked for you.

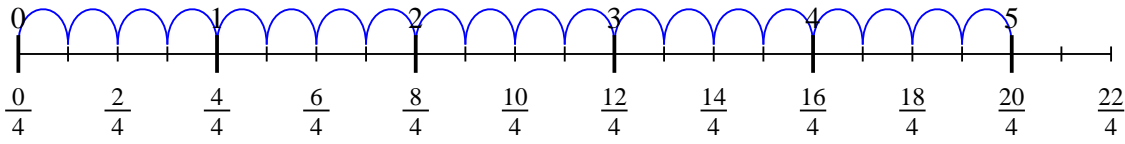
1) $4 \div \frac{1}{6}$



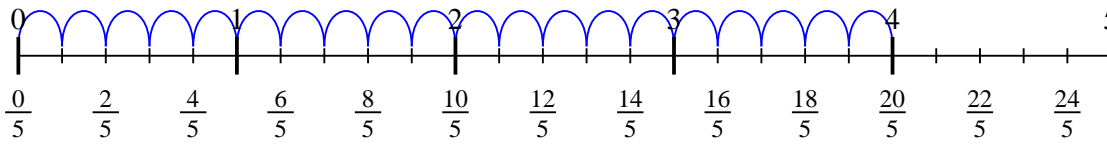
2) $6 \div \frac{1}{6}$



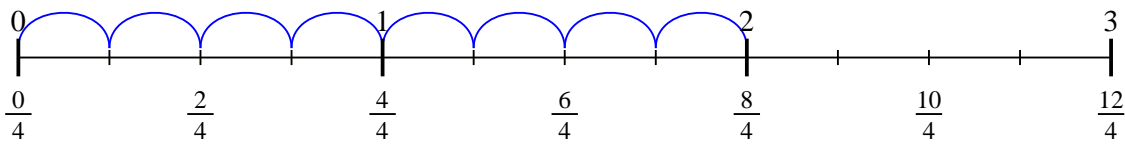
3) $5 \div \frac{1}{4}$



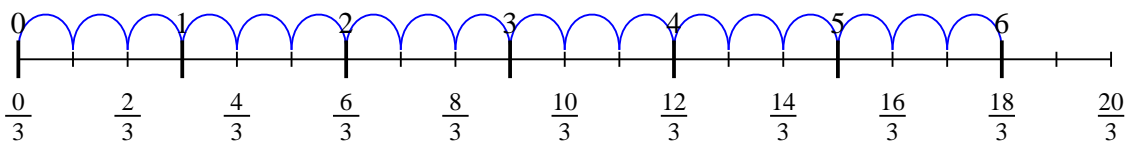
4) $4 \div \frac{1}{5}$



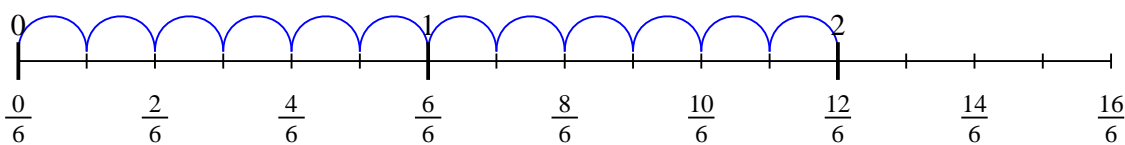
5) $2 \div \frac{1}{4}$



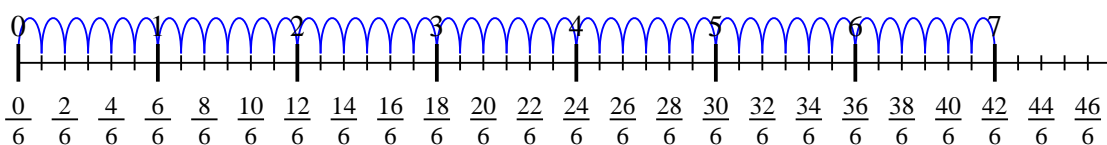
6) $6 \div \frac{1}{3}$



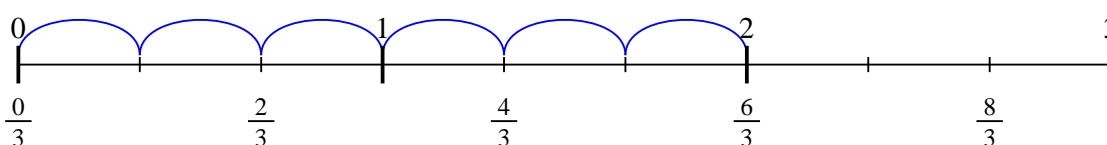
7) $2 \div \frac{1}{6}$



8) $7 \div \frac{1}{6}$



9) $2 \div \frac{1}{3}$



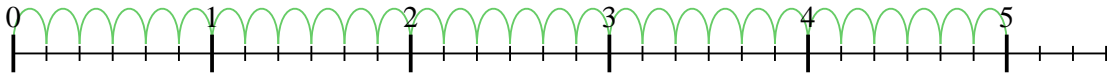
Answers

1. 24
2. 36
3. 20
4. 20
5. 8
6. 18
7. 12
8. 42
9. 6

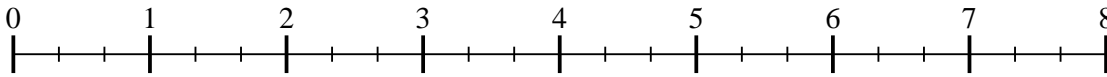


Use the numberline to solve each problem. The first is marked for you.

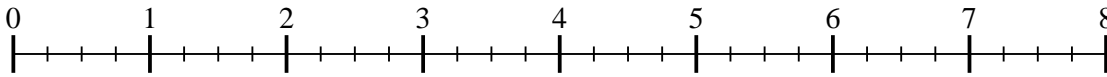
1) $5 \div \frac{1}{6}$



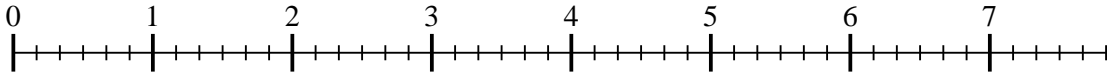
2) $7 \div \frac{1}{3}$



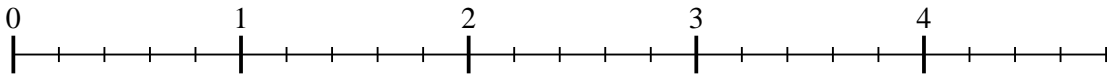
3) $7 \div \frac{1}{4}$



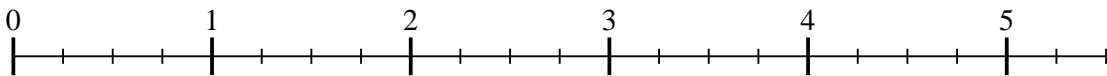
4) $7 \div \frac{1}{6}$



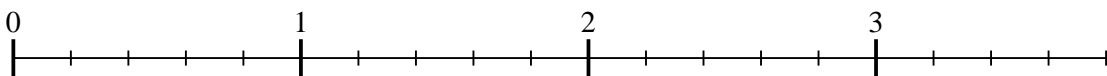
5) $4 \div \frac{1}{5}$



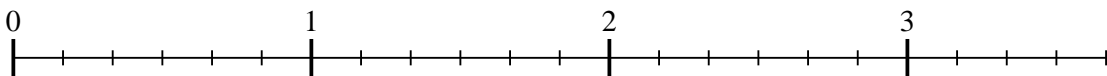
6) $5 \div \frac{1}{4}$



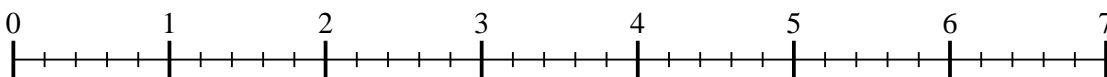
7) $3 \div \frac{1}{5}$



8) $3 \div \frac{1}{6}$



9) $6 \div \frac{1}{5}$



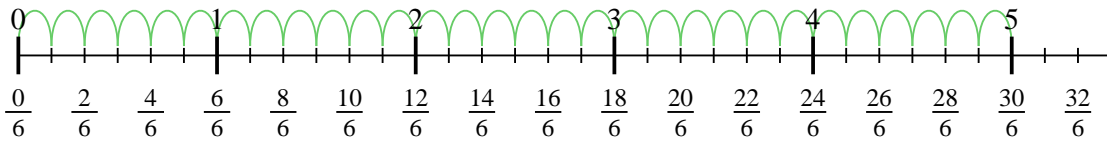
Answers

1. _____
2. _____
3. _____
4. _____
5. _____
6. _____
7. _____
8. _____
9. _____

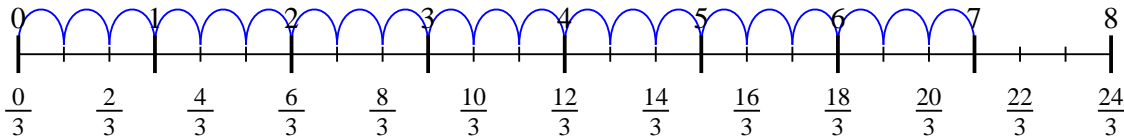


Use the numberline to solve each problem. The first is marked for you.

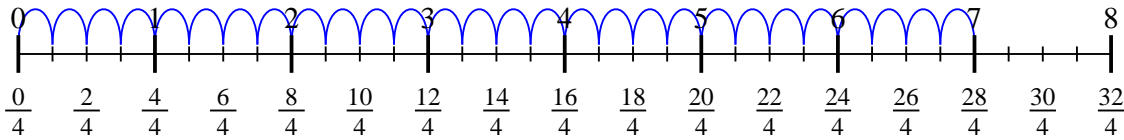
1) $5 \div \frac{1}{6}$



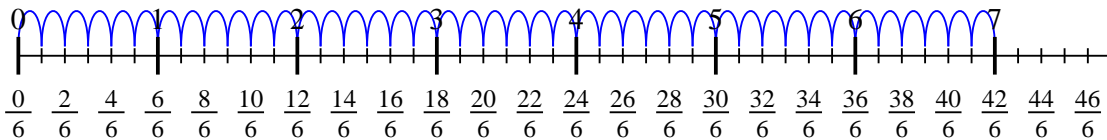
2) $7 \div \frac{1}{3}$



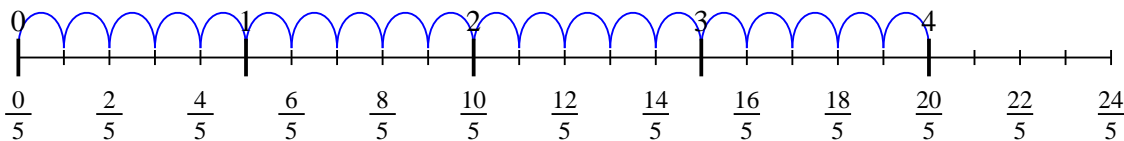
3) $7 \div \frac{1}{4}$



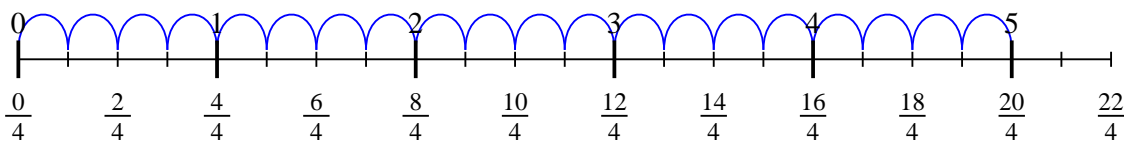
4) $7 \div \frac{1}{6}$



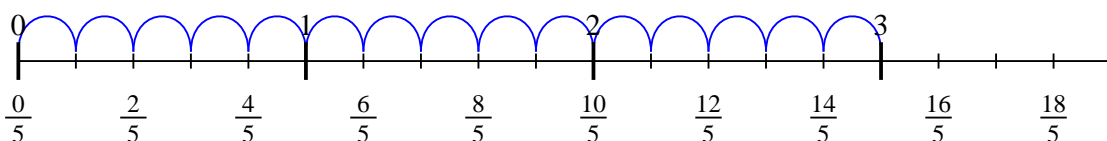
5) $4 \div \frac{1}{5}$



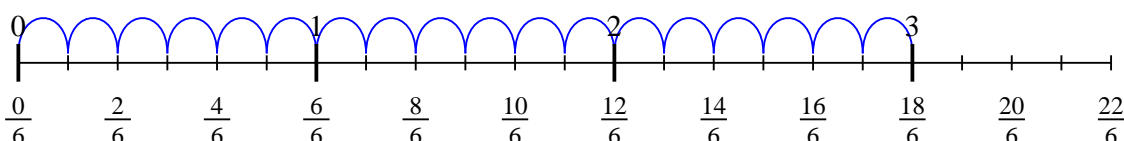
6) $5 \div \frac{1}{4}$



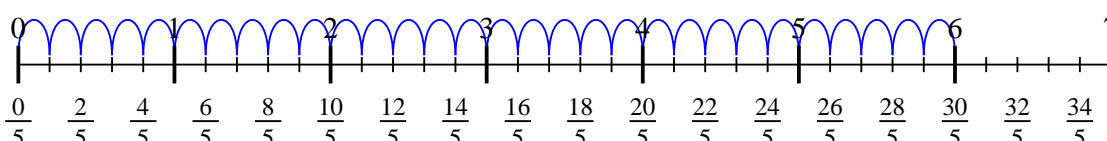
7) $3 \div \frac{1}{5}$



8) $3 \div \frac{1}{6}$



9) $6 \div \frac{1}{5}$



Answers

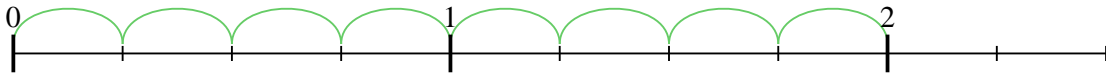
1. 30
2. 21
3. 28
4. 42
5. 20
6. 20
7. 15
8. 18
9. 30



Use the numberline to solve each problem. The first is marked for you.

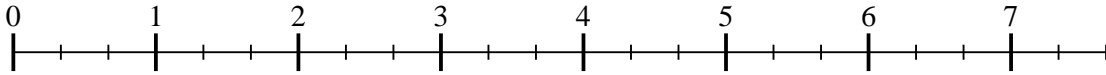
Answers

1) $2 \div \frac{1}{4}$



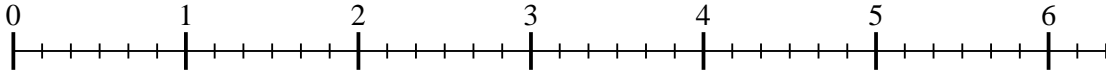
1. _____

2) $7 \div \frac{1}{3}$



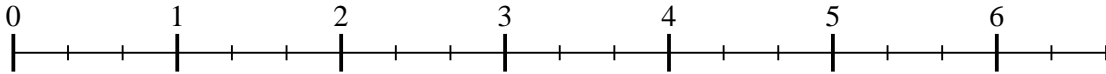
2. _____

3) $6 \div \frac{1}{6}$



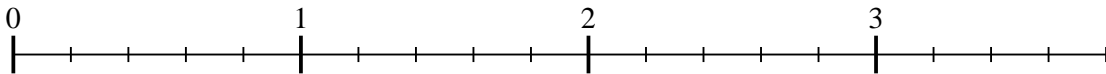
3. _____

4) $6 \div \frac{1}{3}$



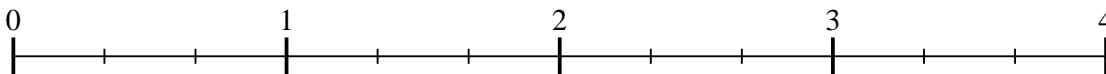
4. _____

5) $3 \div \frac{1}{5}$



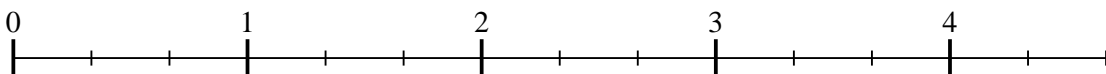
5. _____

6) $3 \div \frac{1}{3}$



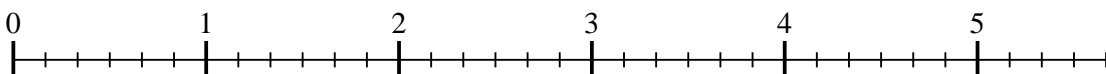
6. _____

7) $4 \div \frac{1}{3}$



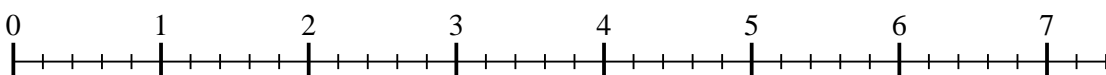
7. _____

8) $5 \div \frac{1}{6}$



8. _____

9) $7 \div \frac{1}{5}$

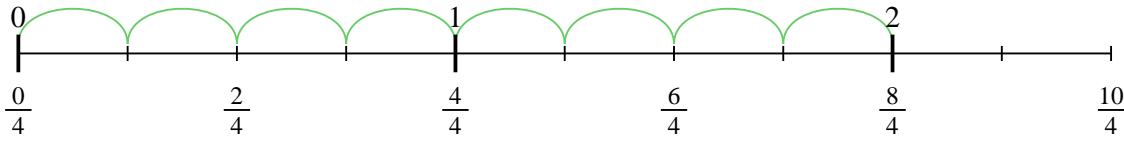


9. _____

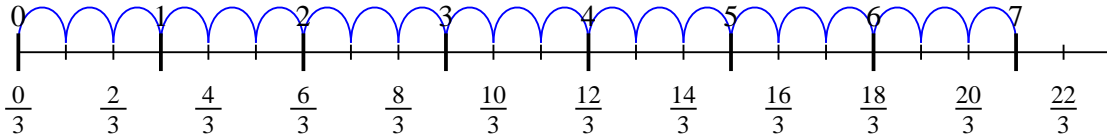


Use the numberline to solve each problem. The first is marked for you.

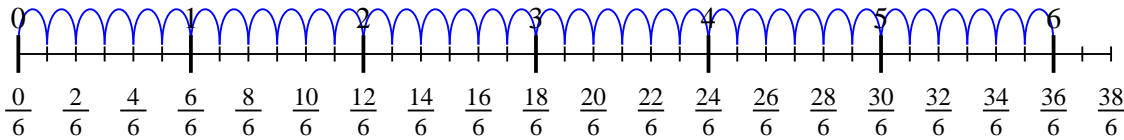
1) $2 \div \frac{1}{4}$



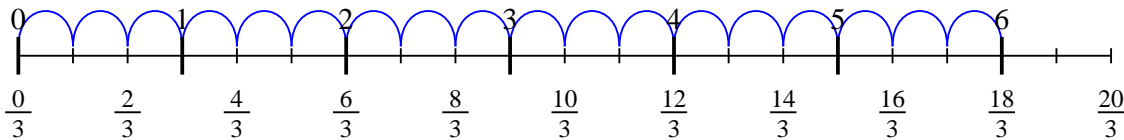
2) $7 \div \frac{1}{3}$



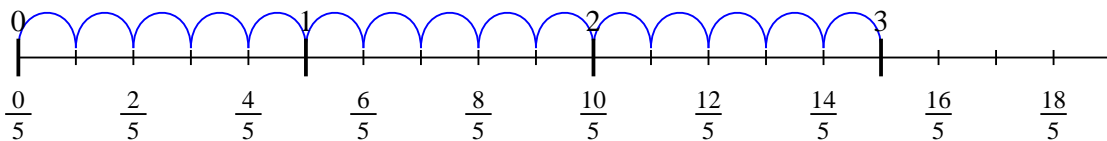
3) $6 \div \frac{1}{6}$



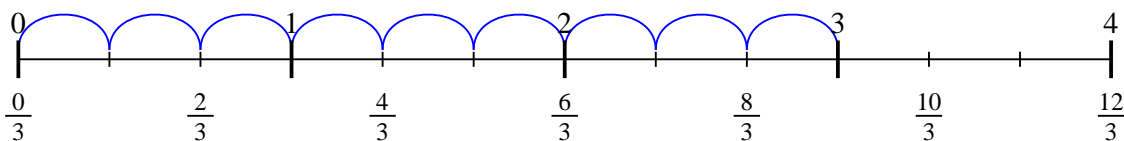
4) $6 \div \frac{1}{3}$



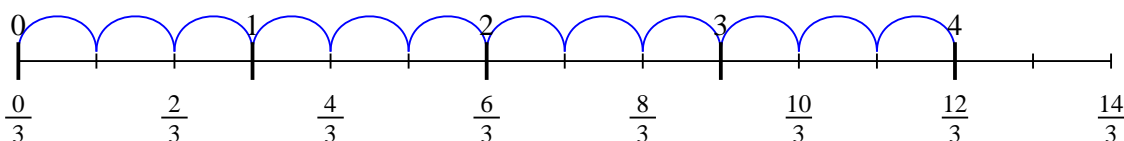
5) $3 \div \frac{1}{5}$



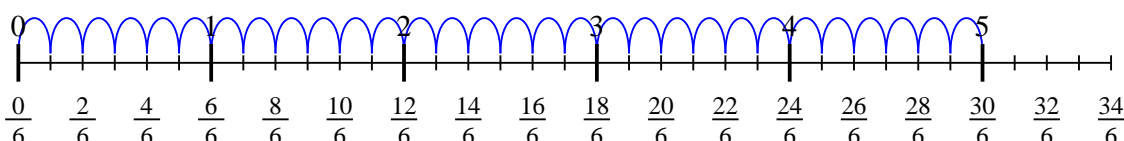
6) $3 \div \frac{1}{3}$



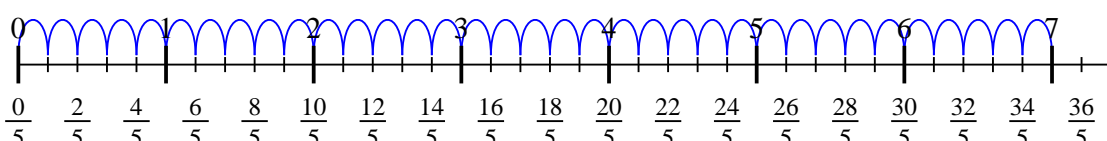
7) $4 \div \frac{1}{3}$



8) $5 \div \frac{1}{6}$



9) $7 \div \frac{1}{5}$



Answers

1. 8
2. 21
3. 36
4. 18
5. 15
6. 9
7. 12
8. 30
9. 35